

ENGLISH

1. Write ten sentences on your favourite sport in your English copy. Why is it your favourite sport? What is the difference between solo and team performance?
2. Write a letter to your friend describing your experience of travelling to a hill station during the summer vacation.
3. Make a list of people you see at home and at school in your subject notebook and write down their genders (MASCULINE / FEMININE / COMMON)
4. Write in your English copy what are the qualities of a true friend? How do you help your true friend in need?
5. Paste five different pictures of tourist places of India in your subject notebook, name them and write five points on each of their characteristic features.

HINDI

1. निम्नलिखित गद्यांश को पढ़कर पूछे गए प्रश्नों के उत्तर लिखिए-

संसार का प्रत्येक प्राणी परिश्रम करता है। मनुष्य और पशु-पक्षी दिन-रात अपने-अपने काम में जुटे रहते हैं। परिश्रम से ही मनुष्य ने सभ्य जीवन प्राप्त किया है। परिश्रम द्वारा असंभव कार्य भी संभव हो जाता है। जीवन की सफलता परिश्रम करने से मिलती है। जो लोग परिश्रम छोड़कर भाग्य का सहारा लेते हैं, वे असफल रहते हैं। मनुष्य परिश्रम से ही अपना भाग्य बनाता है। ईश्वर भी परिश्रमी व्यक्ति की सहायता करते हैं।

क) किस प्रकार के लोग असफल रहते हैं?

ख) 'सफल' का विलोम शब्द क्या होगा?

ग) प्रस्तुत गद्यांश से दो युग्म शब्द छाँटकर लिखिए।


घ) प्रस्तुत गद्यांश के लिए एक उचित शीर्षक लिखिए।

2. जीवन में सफल होने के लिए क्या करना चाहिए। लिखिए।

3. पाठ 'अनोखा ढंग' से हमें क्या प्रेरणा मिलती है?

4. सुबह के दृश्य का चित्र बनाकर चित्र में आए किन्हीं पाँच संज्ञा शब्दों को लिखिए। (स्क्रेप बुक में)

5. नीचे दिए चित्र का वर्णन अपने शब्दों में कीजिए।



BENGALI

1. ‘ওরা অবোধ, ওরা খেলা করছিল, ওদের মাফ করো।’- কারা কাকে এই কথা বলছিল? ওদের মাপ করতে বলা হয়েছিল কেন?
2. ‘আমি মারতেও পারি নে, কাটতেও পারি নে,’- কে মারতে বা কাটতে পারে না? বিধাতা তাকে কোন্ কাজের জন্য পাঠিয়েছেন?
3. ছেলেরা কোথায় যুদ্ধ যুদ্ধ খেলছিল? তাদের যুদ্ধ যুদ্ধ খেলার ফল কী হয়েছিল?
4. ‘তাঁর মনের ফাঁকি ধরে ফেলেছেন।’- কে কার মনের ফাঁকি ধরে ফেলেছিলেন? কখন ধরে ফেলেছিলেন?
5. পাগল ঠাকুরের একজন বিখ্যাত শিষ্যের নাম লেখ। বাল্যকালে সেই শিষ্যের কী নাম ছিল?
6. যৌগিক স্বর কোন্ গুলি? যৌগিক স্বরের অপর নাম কী?
7. নিচের শব্দগুলির বর্ণ বিশ্লেষণ কর:
মহাভারত উজ্জ্বল আক্রমণ বিজ্ঞান

MATHS

Choose the correct answer from the given options;

Product of the place value of 6 in 306035 and the face value of 2 in 4523 is _____

- a) 2000 b) 4000 c) 12000 d) 3000

The smallest 6-digit number using all different digits is_____

- a) 123456 b) 102345 c) 132546 d) None of these

The predecessor of the largest 6-digit number using the digits 3, 4, 5, 6, 7, 9 is equal to _____

- a) 976543 b) 976543 c) 976542 d) None of these

2. Fill in the blanks:

(a) 6 tens + 7 thousands = _____ tens.

(b) Successor of 999999 – Predecessor of 99999 = _____

3. Write the numerals using commas between periods:

Number name	Numerals
a) Seven lakh seven thousand seven	
b) Twenty thousand two	

4. Kavya has 5-digit cards. She has to make the smallest and the largest 5-digit numbers using these digit cards. Help her to find the sum of these two numbers.



5. Solve the riddles:-

- (a) You are given a telephone and asked to multiply all the numbers on the device's number pad. What will be the answer?
- (b)
- I am a 2-digit number.
 - I am smaller than 90 but greater than 50.
 - Both my digits are same.
 - Who am I?

62	122	29
77	36	44

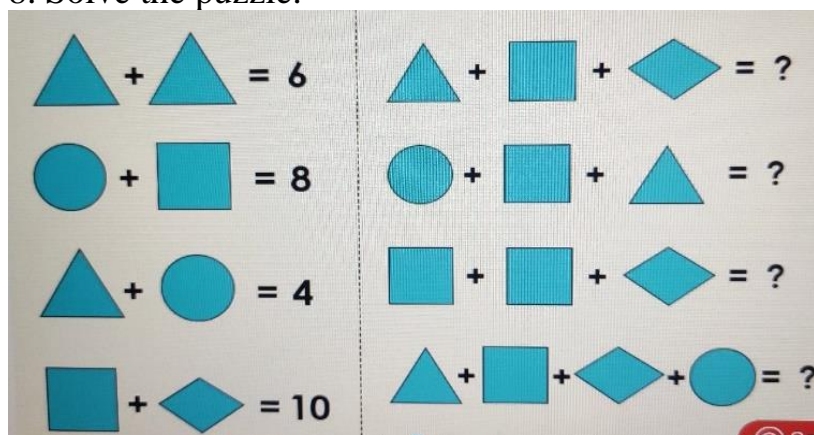
6. Work out the word problem by writing proper statements:

In the first floor of a library there are 126728 books. In the second floor there are 3754 books more than the first floor. How many books are there in the library?

7. Fill in the blanks in the following magic square.

	10	3	6
4	5		9
	11	2	7
1	8		

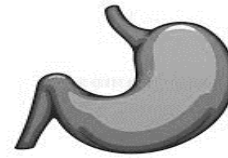
8. Solve the puzzle:



Q1. The long and coiled structure in the digestive system is called _____
(a) Anus (b) Large intestine (c) Small intestine (d) Food pipe.

Q2. Identify the organ given in the diagram alongside.

- (a) Stomach (b) Liver
(c) Pancreas (d) Rectum



Q3. Which of the following statement is correct regarding enamel.

Statement I: It is the inner covering of teeth.

Statement II: It is the hardest substance in human body.

- (a) I is correct
(b) I is incorrect
(c) II is correct
(d) II is incorrect

Q4. We have different types of teeth. Write the difference between pointed teeth and flat teeth.

Q5. Pick out the internal organs from the following:

Eyes, pancreas, oesophagus, ears

Q6. Unscramble the parts of digestive system.

- (a) mertuc _____
(b) ethet _____

Q7. Sumit was asked to decorate his class board with some posters on awareness on healthy habits. He printed a poster directly after downloading it from the internet and forgot to write any caption to generate awareness. Help him by providing a suitable slogan (two lines) to match the poster.
Explain your choice of such a slogan.



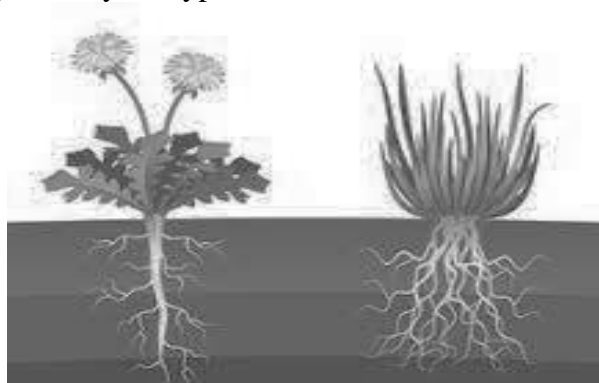
Q8. Why do people having worms inside their stomach and intestine look pale, weak and unhealthy?

Q9. Rewrite the statements correctly.

- (a) Digestion is completed in the stomach.
(b) Pancreas is the largest gland of our body.

Q10. Draw the diagram of the human tongue and label different types of taste buds present on it.

Q11. (a) Identify the types of roots.



ROOT A

ROOT B

(b) Write the difference between these two types of roots.

(c) Name two plants with

Root A _____

Root B _____

SOCIAL SCIENCE

1. _____ is the name of Angad's family.
2. The children learn good _____ from the members of the family.
3. A _____ is an organised group of people.
4. The _____ is used for hearing impaired children.
5. Children learn family crafts like _____ from their family members.
6. King Mahabali was the demon king of _____.
7. Draw a rangoli.
8. In which state is Navratri celebrated? What is the name of this festival in West Bengal.
9. What did Louis Braille invent. Who was helped by this invention ?
10. Draw any three Sign languages.
11. In a political map of India-
12. Name and colour the following states-
i. West Bengal ii. Gujarat iii. Madhya Pradesh iv. Kerala v. Punjab

**NOTE : HOLIDAY HOMEWORK FOR ALL SUBJECT TO BE DONE IN YOUR SUBJECT
NOTEBOOKS PROVIDED BY THE SCHOOL.**